

2005
MID-HSC COURSE
EXAMINATION

PHYSICS

2 UNIT

General Instructions

- Assessment Task No. 1
- Weighting – 18%
- Reading time – 5 minutes
- Working time – 1 hour & 30 minutes
- Physics Formulae & Data Sheets are attached to the back of this paper.

This examination has TWO parts.

Part A **Multiple Choice**

Total marks (10)

- Attempt ALL Questions
- Mark your answers on the Multiple Choice Answer Sheet provided at the back of this paper.

Part B **Extended Answer Questions**

Total marks (44)

- Attempt ALL Questions
- Write your answers in the spaces provided on the Examination Paper.

PART A

Total Marks (10)

Attempt all questions 1 to 10.

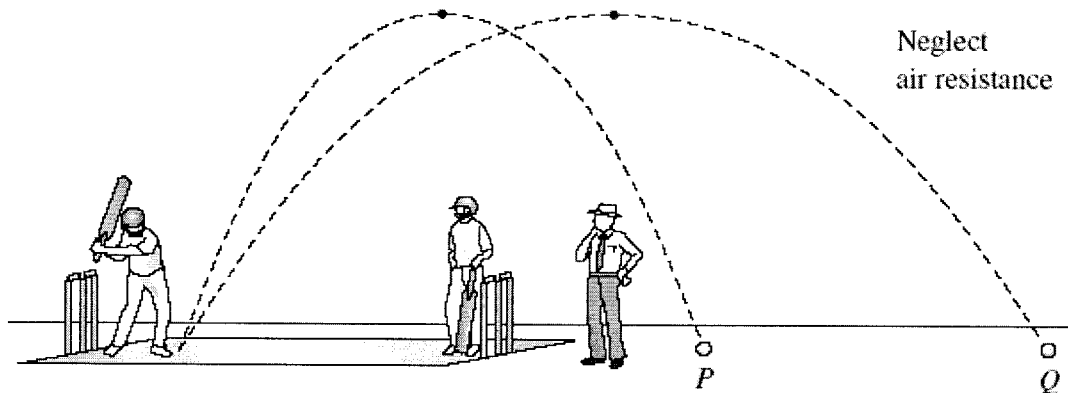
Allow 18 minutes for this part.

Questions 1 to 10 are worth One Mark Each.

For each question (1 – 10) choose the best of the four possible answers and indicate your choice by marking the appropriate space on the Answer Sheet provided. Mark only ONE choice for each question, using a pencil. Do NOT use a ball-point or an ink pen. If you change your mind, completely erase your first mark.

QUESTION 1

The picture below shows a game of cricket.



The picture shows two consecutive shots by the batsman. Both balls reach the same maximum height above the ground but ball Q travels twice as far as ball P.

Which of the following is DIFFERENT for balls P and Q?

- (A) Gravitational acceleration
- (B) Gravitational force
- (C) Time of flight
- (D) Initial velocity

QUESTION 2

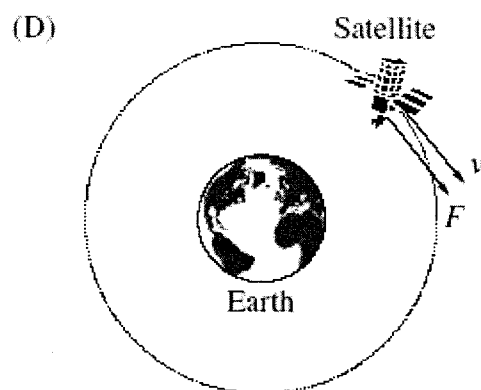
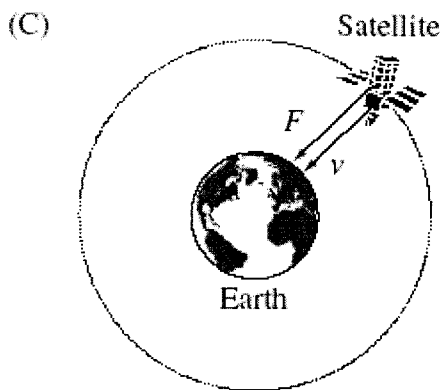
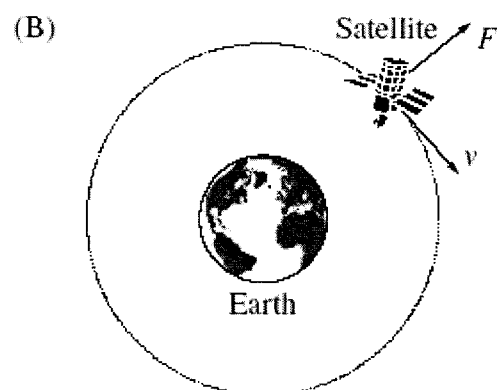
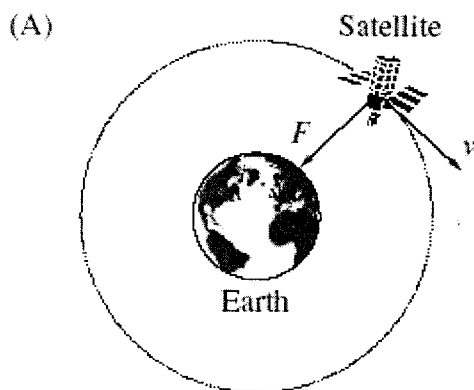
A satellite moves in uniform circular motion around Earth.
The following table shows the symbols used in the diagrams below.
These diagrams are NOT drawn to scale.

Key

F = Net force on satellite

v = Velocity of satellite

Which diagram shows the correct direction of F and v at the position indicated?



QUESTION 3

A man weighs 1000 N at the surface of the earth. With the aid of the information in the following table, estimate the man's weight on the surface of planet X.

PLANET	MASS (10^{24} kg)	RADIUS (km)
X	3.0	6400
Earth	6.0	6400

- (A) 500 N
- (B) 1000 N
- (C) 2000 N
- (D) 4000 N

QUESTION 4

An astronaut set out in a spaceship from Earth orbit to travel to a nearby star in our galaxy. The spaceship travelled at a constant speed of $0.95c$. When the spaceship reached the star the on-board clock showed the astronaut that the journey had taken 5 years.

An identical clock remained on Earth. What time in years had elapsed on this clock as seen by an observer who had remained on Earth with the clock?

- (A) 16.0
- (B) 22.4
- (C) 51.3
- (D) 100.0

QUESTION 5

The most likely cause of the orbital decay of satellites in low Earth orbit is:

- (A) Decrease in mass as fuel is used up
- (B) Friction between the satellite and the solar wind
- (C) Friction between the satellite and cosmic ray particles
- (D) Friction between the satellite and the top of the Earth's atmosphere

QUESTION 6

A physicist builds a transformer to increase the 240 V AC mains electricity supply to 480 V AC. To do this, the number of turns of wire on the primary coil must be:

- (A) The same as the number of turns of wire on the secondary coil
- (B) Double the number of turns of wire on the secondary coil
- (C) Less than the number of turns of wire on the secondary coil
- (D) More than the number of turns of wire on the secondary coil

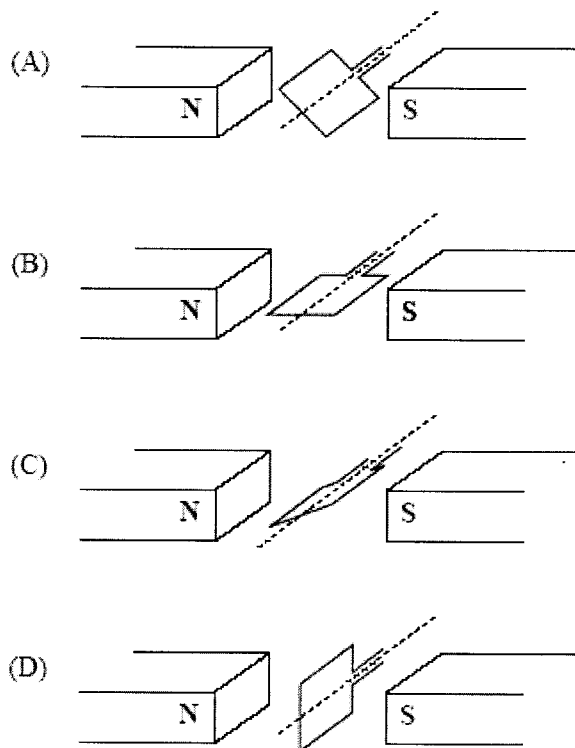
QUESTION 7

Of the following components, the one that is least likely to be used in an AC electric motor is:

- (A) Slip rings
- (B) Split ring commutator
- (C) Rotor
- (D) Stator

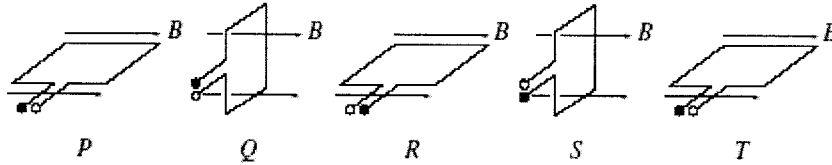
QUESTION 8

A coil of wire is in a uniform magnetic field between two magnets. The coil of wire is rotated about an axis. In which of the following diagrams is the magnetic flux through the coil greatest?

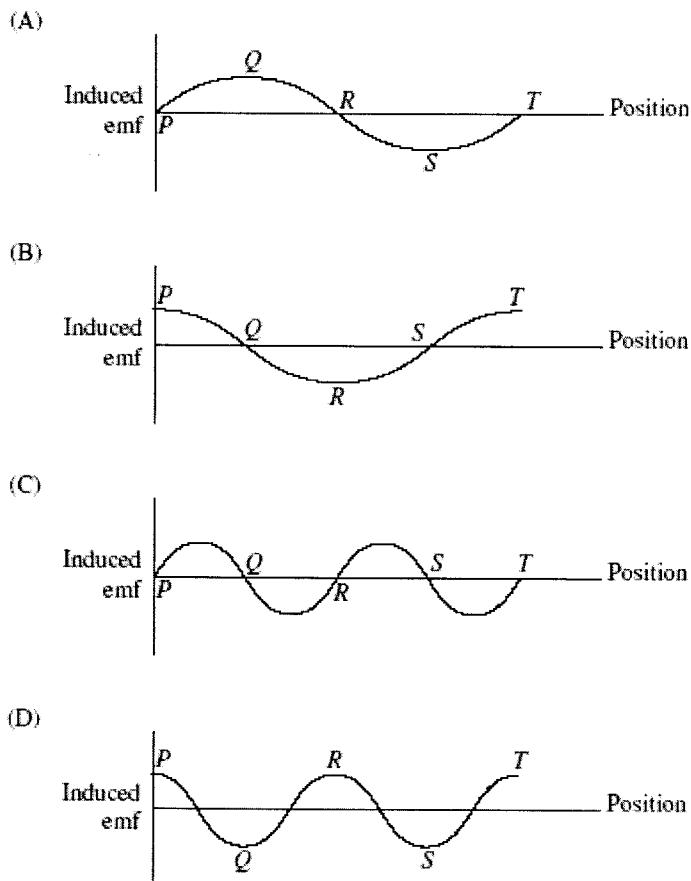


QUESTION 9

The coil of an AC generator rotates at a constant rate in a magnetic field as shown.



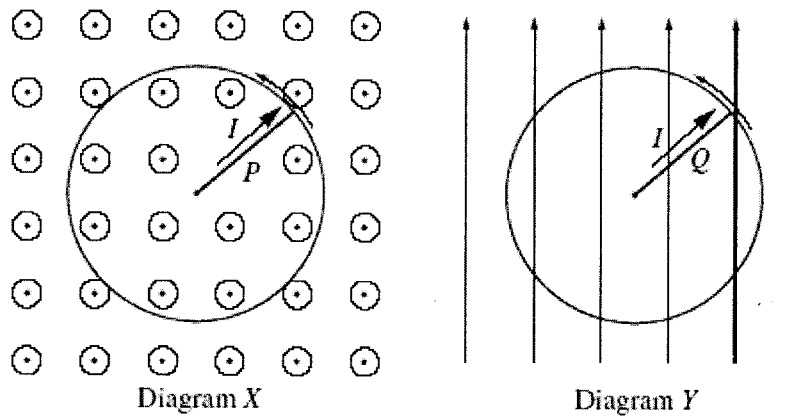
Which of the following diagrams represents the curve of induced emf against position?



QUESTION 10

Two straight metal rods, P and Q , have the same length. They are each pivoted at one end and rotated with the same orbital speed so that they sweep out horizontal circular paths as shown in diagrams X and Y . A constant current I is flowing along each rod, as shown.

In diagram X , a constant magnetic field is applied *at right angles to the plane* of the circular path. In diagram Y , a uniform magnetic field of the same magnitude is applied *in the plane* of the circular path.



Which of the following statements about the forces acting on rod P and rod Q is correct?

- (A) The magnitude of the force on P is exactly the same as the magnitude of the force on Q at all times.
- (B) The magnitude of the force on P is constant and the magnitude of the force on Q is zero.
- (C) The magnitude of the force on P is constant and the magnitude of the force on Q varies with time.
- (D) The magnitude of the force on P varies with time and the magnitude of the force on Q is constant.

PART B

Total Marks (44)

Attempt all questions 11 to 20.

Allow 72 minutes for this part.

Questions 11 to 20 are FREE RESPONSE Questions.

For each question (11 – 20) write your answer in the appropriate space. You are advised to show your *full* working for all answers as marks may be awarded for relevant working.

QUESTION 11 (4 Marks)

Marks

- (a) Use the Law of Conservation of Momentum to explain how a space rocket such as the Space Shuttle lifts off the ground at launch.

.....
.....
.....
.....
.....
.....

2

- (b) Explain why the acceleration of the Space Shuttle increases during launch and describe how this affects the forces experienced by the astronauts.

.....
.....
.....
.....

2

QUESTION 12 (5 Marks)

Marks

Isaac Newton did much to improve our understanding of gravity.

- (a) There are many natural satellites in our Solar System. The Earth moves in orbit around the Sun and the Moon is in orbit around the Earth to name just two examples. Briefly, discuss the importance of Newton's Law of Universal Gravitation in understanding and calculating the motion of such satellites.** **2**

.....

.....

.....

.....

.....

.....

- (b) Calculate the gravitational force of the Earth on the Moon, given that the mass of Earth is 5.98×10^{24} kg, mass of Moon is 7.35×10^{22} kg and distance from the Earth to the Moon is 3.844×10^8 m.** **1**

.....

.....

.....

- (c) Identify an example of how gravity can be used to advantage by a space probe.** **1**

.....

.....

- (d) A spaceship flies past the Earth parallel to its axis of rotation at a speed of $0.99c$. Determine the diameter of the Earth from the north to south pole as seen by the pilot of the spaceship. The diameter of the Earth as seen by an observer stationary with respect to the Earth is 1.28×10^7 m.** **1**

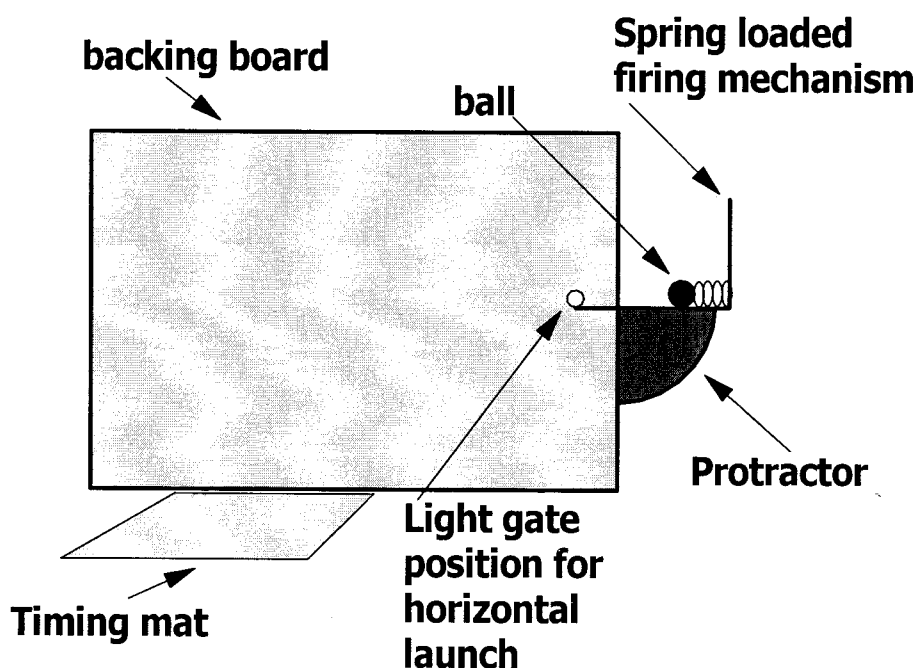
.....

.....

.....

QUESTION 13 (7 Marks)

A Physics student uses the apparatus shown below to measure some key parameters of projectile motion.



A steel ball was launched from a spring loaded firing mechanism. The launch platform could be arranged horizontally or at various angles θ to the horizontal. The height from which the ball is launched could also be adjusted. The initial velocity v_0 of the ball could be measured using a light gate held by a retort stand (not shown here) and slotted into position in the backing board. The time of flight could be measured using a light gate in combination with a timing mat. Both the light gate and timing mat were connected to the appropriate terminals of a data logger.

The following table contains all the data recorded by the student. The student took only one measurement of each variable. The range was measured by observing where the ball landed and measuring the distance with a ruler.

v_0 (m/s)	θ (degrees)	Height from which ball was launched (m)	Time of flight (s)	Range (m)
0.200	0°	0.50	0.319	0.060
0.195	30°	0.50	0.330	0.045
0.190	45°	0.50	0.333	0.040
0.183	60°	0.50	0.336	0.030

Questions appear on next page.

Marks

(a) For the case of horizontal launch, compare the experimentally obtained value of the time of flight with that which is expected from theory.

2

.....
.....
.....
.....

(b) For the case of $\theta = 30^\circ$, compare the experimental value of the range with that which is expected from theory given the initial velocity, launch angle and time of flight as stated in the table.

1

.....
.....
.....

(c) For the case of $\theta = 60^\circ$, determine the magnitude of the vertical component of velocity at the instant the ball hits the timing mat. Use the values of the initial velocity, launch angle and time of flight as stated in the table.

1

.....
.....
.....

(d) State TWO changes to the method of this experiment that would improve the reliability of the experiment.

2

.....
.....
.....
.....

(e) Explain why the initial velocity of the ball decreases as θ increases, even though the force provided by the spring remains the same.


1

.....
.....

QUESTION 14 (6 Marks)

Marks

- (a) Identify the structure attached to the power pole in the photograph at the right and discuss the need for these structures in transferring electrical energy from a power station to its point of use.



4

.....

.....

.....

.....

.....

.....

.....

.....

.....

.....

Fig. 1

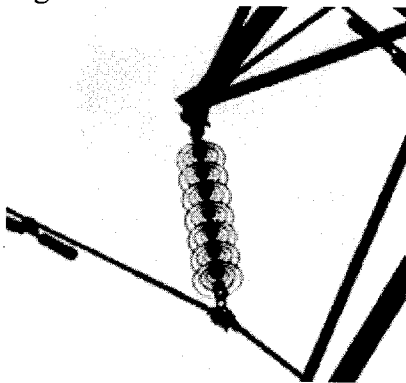



Fig. 2



- (b) With reference to Figures 1 and 2 above identify how transmission lines are insulated from supporting structures and protected from lightning strikes.

2

.....

.....

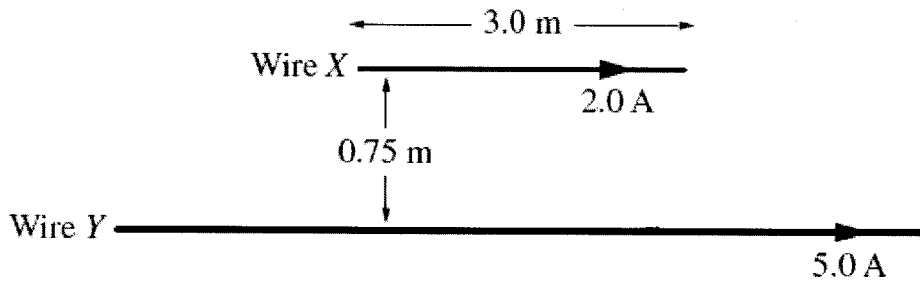
.....

.....

QUESTION 15 (6 Marks)

Marks

Two parallel wires are separated by a distance of 0.75 m. Wire X is 3.0 m long and carries a current of 2.0 A. Wire Y can be considered to be infinitely long and carries a current of 5.0 A. Both currents flow in the same direction along the wires.



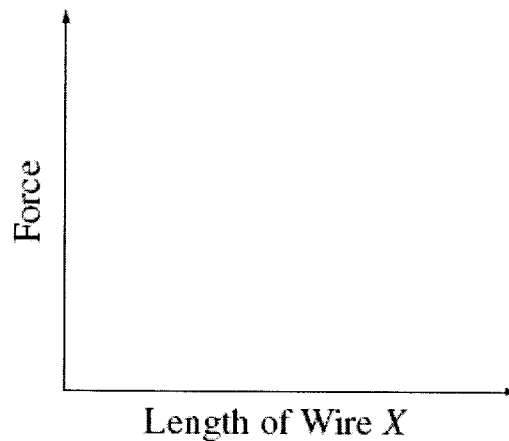
1

(a) What is the direction of the force that exists between the two wires?

.....

2

(b) On the axes, sketch a graph that shows how the force between the two wires would vary if the length of Wire X was decreased.



3

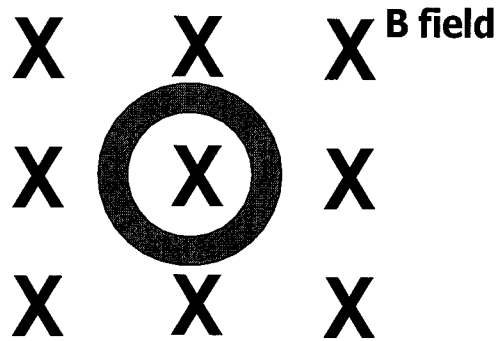
(c) In your Physics course you have performed a first-hand investigation to demonstrate the motor effect. Explain how your results demonstrated that effect.

.....
.....
.....
.....
.....
.....

QUESTION 16 (4 Marks)

Marks

In the diagram below a thin loop of copper wire is sitting stationary in a uniform magnetic field directed down into the plane of the page. The magnetic field is supplied by an electromagnet with the north pole sitting above the plane of the page and the south pole sitting below.



- (a) Describe how a potential difference could be generated within the loop without touching or moving the copper loop.**

2

.....
.....
.....
.....

- (b) Assume the potential difference across the loop produces a clockwise current viewed from above the plane of the page. Use Lenz's Law to explain how such a current direction could be achieved.**

2

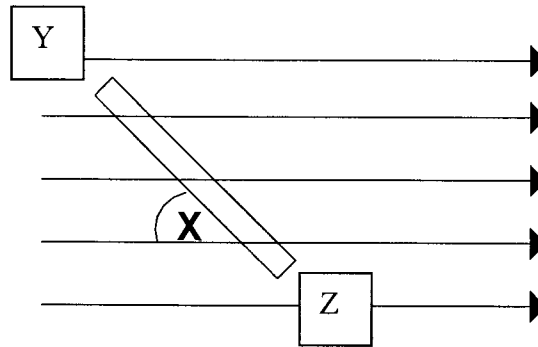
.....
.....
.....
.....

QUESTION 17 (1 Mark)

Marks

The conductor shown below is lying in a magnetic field at an angle of $X = 30^\circ$ to the field. It is carrying a current from Y to Z.

1



State the direction of the force on the conductor.

.....

QUESTION 18 (2 Marks)

It can be shown experimentally that a DC electric motor operating at full speed uses less current than an identical motor running at half speed. Explain this observation.

2

.....
.....
.....
.....
.....

QUESTION 19 (3 Marks)

Describe a first-hand investigation that you have performed to demonstrate the production of an alternating current.

3

.....
.....
.....
.....
.....
.....

